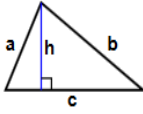
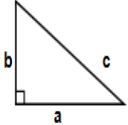
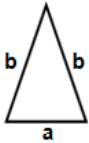





| | | |
|---|---|---|
| 1)  Find perimeter of triangle $h = 67$, $a = 97$ ft, $b = 100$ ft, $c = 100$ ft Answer: _____ | 2) $4\frac{4}{9} \times 1\frac{1}{2}$ Answer: _____ | 3) A number was shared in the ratio 15:1. The smaller share was 20. What was the total amount shared? Answer: _____ |
| 4)  Find area of triangle $a = 93$ in, $b = 96$ in Answer: _____ | 5) $75 - (-22)$ Answer: _____ | 6) $75 - (-22)$ Answer: _____ |
| 7) Find the mode of the following set of data: 28, 28, 28, 28, 3, 3, 3, 3, 3, 8, 8, 8, 8, 17, 17, 17, 17, 17 Answer: _____ | 8)  Find perimeter of triangle $a = 64$ cm, $b = 87$ cm Answer: _____ | 9) Write 0.007 in standard form. Answer: _____ |
| 10) $14\frac{14}{9} + 1\frac{1}{12}$ Answer: _____ | 11) A number was shared in the ratio 4:6. The smaller share was 20. What was the total amount shared? Answer: _____ | 12)  'Name the type of angle. Answer: _____ |
| 13) $(10 \times 2^{-8}) / (5 \times 8^{-5})$ Answer: _____ | 14) Solve by factorising $j^2 - 7j + 12 = 0$ Answer: _____ | 15) Find the value of 'x' by completing the square of the following equation: $2 + 6x + 8$ Answer: _____ |

Name: _____

February 07, 2023



- 16) Find the value of 'x' by completing the square of the following equation:
 $x^2 + 6x + 8$

Answer: _____

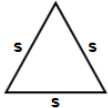
- 17) $5000 \div 1000$

Answer: _____

- 18) $80 + (-36)$

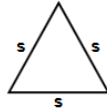
Answer: _____

- 19) Find area of triangle $s = 89$ ft



Answer: _____

- 20) Find area of triangle $s = 89$ ft



Answer: _____

Total: ____ / 20

Name: _____

Sr: 07022023-2995

February 07, 2023



11-PLUS
SATS
GCSES



Answers:

- | | | | | | | |
|---------------------|-----------------------|----------------------|-----------|-----------------------|-----------------------|--------------------|
| 1) 297ft | 2) $6\frac{2}{3}$ | 3) 320 | 4) 4464in | 5) 97 | 6) 97 | 7) 3 |
| 8) 238cm | 9) 7×10^{-3} | 10) $1\frac{23}{36}$ | 11) 50 | 12) Right | 13) 256 | 14) $j = 4$ or 3 |
| 15) $(x + 3)^2 - 1$ | 16) $(x + 3)^2 - 1$ | 17) 5 | 18) 44 | 19) 3429.8936116883ft | 20) 3429.8936116883ft | |